




More or Less Table: *Is 2 A Lot?* Name: _____

Draw the quantities:

5 stars	is less than 	10 stars
3 trees	is more than 	2 trees
10 smiley faces	is more than 	8 smiley faces

Decide if the first quantity is “more than” or “less than” the second quantity.

2 days	is more than	1 day
100 seashells	is less than	1,000 seashells
32 dollars		35 dollars
7 giraffes		3 giraffes
16 socks		22 socks
90 minutes		100 minutes
13 friends		9 friends
5 pizza slices		3 pizza slices
8 bananas		10 bananas
4 quarters		7 quarters